

**Q1.**

Here is part of a calendar.

<b>December</b>						
Mon	Tues	Wed	Thur	Fri	Sat	Sun
		1	2	3	4	
6	7	8	9	10		
13	14	15				
20	21	22				
27	28					

Tyrone's birthday is on **December 18th**.

On what day of the week is Tyrone's birthday?

1 mark

**Q2.**

How many days are there in September, October and November altogether?

days
------

1 mark

**Q3.**

Here is the morning timetable for Chen's class this week.

Time	Mon	Tue	Wed	Thu	Fri
9:00 am – 10:30 am	Maths	English	Maths	English	Maths
10:30 am – 11:00 am	Break	Break	Break	Break	Break

11:00 am – 12:00 pm	English	Maths	Science	Maths	English
---------------------	---------	-------	---------	-------	---------

What is the **total** number of hours for **English** on this timetable?

hours

1 mark

**Q4.**

Joe goes skating every Saturday.

He went skating on Saturday January 1st.



Altogether, how many times did Joe go skating in January?

1 mark

**Q5.**

Here is part of the timetable for Class 6 on a Monday.

am				pm		
10:35	10:55	11:45	12:20	1:15	2:15	
break	History	Science	lunch	PE		

Look at the timetable.

How long is it from the **end** of break to the **start** of lunch?

1 mark

Nisha leaves the Science lesson after 25 minutes.

Then she goes to the dentist.

What time does she leave the Science lesson?

1 mark

**Q6.**


Here are the sunrise and sunset times for some days in July.

Date	Sunrise	Sunset
7th	04:53	21:18
14th	05:00	21:12
21st	05:09	21:05
28th	05:18	20:55

How many minutes earlier is the **sunset** on 28th July than on 7th July?

1 mark

**Q7.**



Weston Castle Opening Times		
	July 1st to August 31st	September 1st to June 30th
Monday to Friday	10 am – 7 pm	closed
Saturday and Sunday	9 am – 8 pm	1 pm – 5 pm

At what time does the castle **close** on **Wednesday July 15<sup>th</sup>**?

1 mark

For which **months** is the castle open **seven days a week**?

---

1 mark

On **Sunday March 8<sup>th</sup>** John goes into the castle at **3pm**.

He stays until closing time.

For how many **hours** does he stay in the castle?

1 mark

**Q8.**

William wants to travel to Paris by train.

He needs to arrive in Paris by **5:30 pm**.

Circle the **latest time** that William can leave London.

Leaves London	Arrives Paris
12:01	15:22
12:25	15:56
13:31	16:53

14:01	17:26
14:31	17:53
15:31	18:53
16:01	19:20

1 mark

**Q9.**



Here is part of a train timetable.

Edinburgh	–	09.35	–	–	13.35	–	–
Glasgow	09.15	–	11.15	13.15	–	13.45	15.15
Stirling	09.57	–	11.57	13.57	–	14.29	15.57
Perth	10.34	10.51	12.34	14.34	14.50	15.15	16.35
Inverness	–	13.10	–	–	17.05	–	–

How long does the first train from Edinburgh take to travel to Inverness?

1 mark

Ellen is at Glasgow station at 1.30 pm.

She wants to travel to Perth.

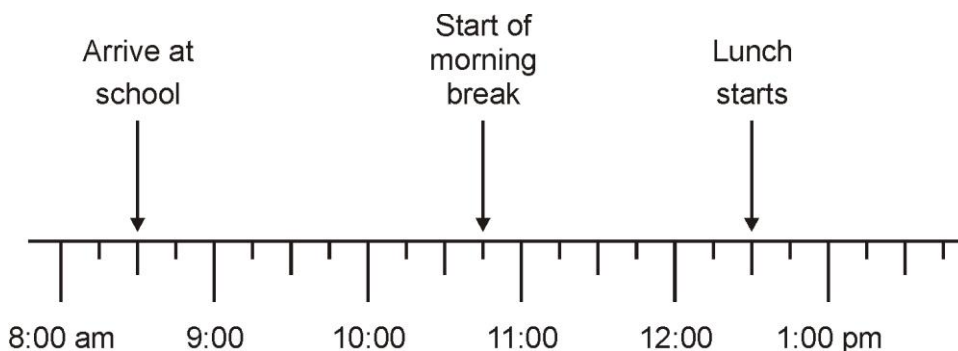
She catches the next train.

At what time will she arrive in Perth?

1 mark

**Q10.**

Jamie makes a time line of part of his day.



What time does Jamie's morning break start?

1 mark

Lunch lasts for three-quarters of an hour.

What time does lunch **finish**?

1 mark

**Q11.**

Here is part of the bus timetable from Riverdale to Mott Haven.

Riverdale	10:02	10:12	10:31	10:48
Kingsbridge	10:11	10:21	10:38	10:55
Fordham	10:28	10:38	10:54	11:11
Tremont	10:36	10:44	11:00	11:17
Mott Haven	10:53	11:01	11:17	11:34

How many minutes does it take the 10:31 bus from Riverdale to reach Mott Haven?

1 mark

Mr Evans is at Fordham at 10:30

What is the **earliest** time he can reach Tremont on the bus?

1 mark

**Q12.**

Here is the calendar for August 1998.

**August 1998**

Sun	Mon	Tues	Wed	Thur	Fri	Sat
						1
2	3	4	5	6	7	8
9	10	11	12	13	14	15
16	17	18	19	20	21	22
23	24	25	26	27	28	29
30	31					

Simon's birthday is on **August 20th**.

In 1998 he had a party on the **Sunday after** his birthday.

What was the **date** of his party?

1 mark

Tina's birthday is on **September 9th**.

On what **day of the week** was her birthday in 1998?

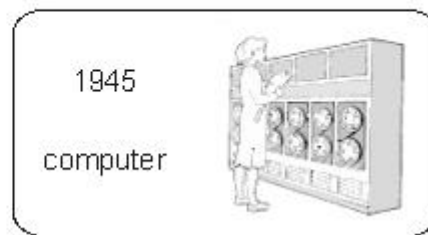
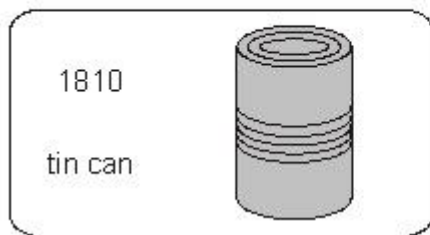
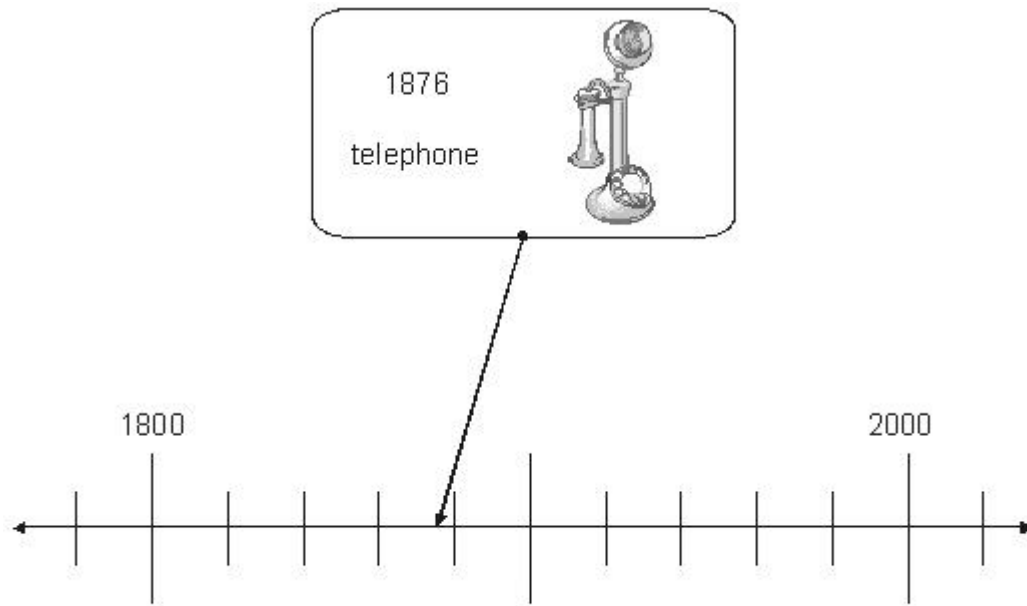
1 mark

**Q13.**

Here is part of a time line.

Draw a line from each invention to the correct point on the time line.

One has been done for you.



2 marks



Mark schemes

**Q1.**

Saturday

*Accept any reasonable spelling as long as the intention is clear.*

[1]

**Q2.**

91

[1]

**Q3.**

5

**Do not** accept 300 (minutes).

[1]

**Q4.**

5

**Do not** accept a list of dates.

[1]

**Q5.**

(a) 1 hour 25 minutes

*The answer is a time interval*

1

(b) 12:10pm

*The answer is a specific time*

1

[2]

**Q6.**

23

[1]

**Q7.**

7

*Accept 7.00 **OR** 7 o' clock **OR** 19.00*

1

July **AND** August

*Both months must be correct.*

*Accept months in any order.*

*Accept recognisable mis-spellings.*

**Q8.**

The correct time circled as shown:

Leaves London	Arrives Paris
12:01	15:22
12:25	15:56
13:31	16:53
14:01	17:26
14:31	17:53
15:31	18:53
16:01	19:20

*Accept alternative unambiguous positive indications, e.g. 14:01 ticked or underlined.*

*Accept 17:26 circled in addition to 14:01, provided no other time is circled.*

**Do not** accept only the arrival time 17:26 circled.

**Q9.**

- (a) 3 hours 35 minutes

*The answer is a time interval  
(see guidance)*

- (b) 15:15

*The answer is a specific time  
(see guidance)  
Accept quarter past three*

**Q10.**

- (a) 10:45am

*The answer is a specific time (see General guidance: responses involving time for guidance).*

(b) 1:15pm

*The answer is a specific time (see General guidance: responses involving time for guidance).*

1

1

[2]

**Q11.**

(a) 46

*The answer is a time interval.*

1

(b) 10:44

*The answer is a specific time.*

1

[2]

**Q12.**

(a) 23rd of August **OR** 23.8.98

*Accept 23rd **OR** 23 **OR** unambiguous circling of the correct date on the calendar.*

1

(b) Wednesday

*Accept Wed **OR** recognisable misspellings of Wednesday **OR** Wednesday ringed.*

1

[2]

**Q13.**

(a) Answer for tin can joined to the time line in the range 1805 to 1815 exclusive.

1

(b) Answer for computer joined to the time line in the range 1940 to 1950 exclusive.

1

[2]